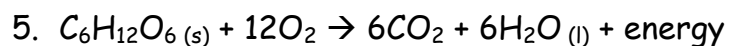
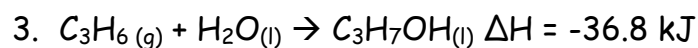
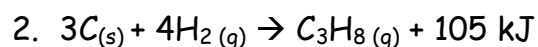
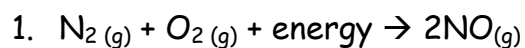


Chemistry 11

Energy Problems

Directions: For of the following questions, answer the following:

1. State the type of reaction (Endothermic or Exothermic)
2. Sketch the potential energy graph, showing ΔH
3. State whether the reactants or products have more energy



Name: _____

Period: _____

