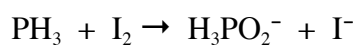
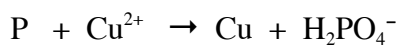




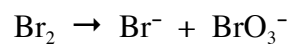
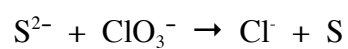
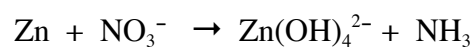
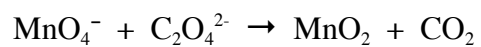
Name _____ Block: _____ Date: _____

Chemistry 12
BALANCING REDOX EQUATIONS

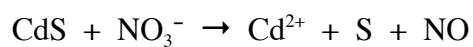
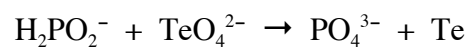
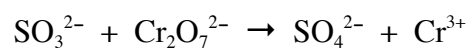

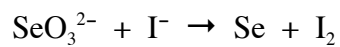
Balance the following redox equations using half-reactions.

A. ACID SOLUTIONS



B. BASIC SOLUTIONS

Balance the following using oxidation numbers.

A. ACID SOLUTIONS

B. BASIC SOLUTIONS

